

You were so good at making equal groups. Could you help me with some more maths?

I now need to count my groups to see how many I have

Can you count the windows?




$$2 + 2 + 2 =$$

Can you count the wheels?




$$_ + _ + _ =$$

Can you count the eyes?





$$_ + _ + _ + _ =$$


Can you count the lamps?



$$_ + _ + _ + _ + _ =$$




How many cubes are there?




True or false?

There are 40 jewels altogether.

True or false?



How many crayons are there?



Challenge

Danyal and Theo have been counting in 5s starting from 0.

Danyal



All of my answers will be odd numbers.

Theo



All of my answers will end in a 5 or a 0.

Who is correct? Explain how you know

Eva and Whitney are making equal groups of bread rolls.



Eva



We need one more group to make 40

We need 10 more rolls to make 40



Whitney

Who do you agree with? Explain why.