


cube cylinder cuboid pyramid cone sphere

Circle the cubes. Tick the pyramids.



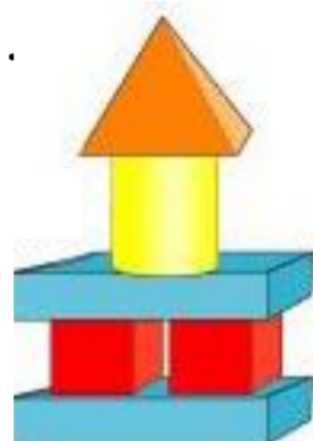
Complete the sentences to describe the model.

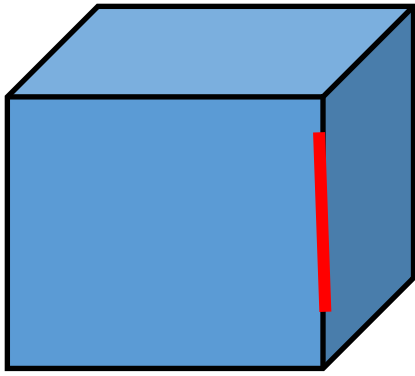
There are _____ cuboids.

There are _____ cylinders.

There are _____ pyramids.

There are _____ cubes.





Part of an edge, the red line shows...



Shape	Name	Edges	Faces
			
			
			

Complete the sentences to describe the model.

There are _____ cuboids.

There are _____ cylinders.

There are _____ pyramids.

There are _____ cubes.

