


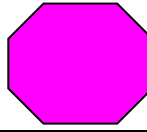
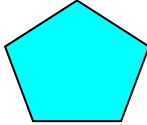
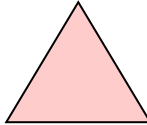


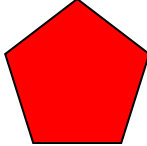




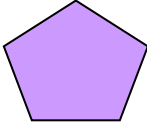
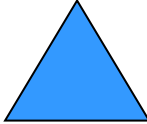




# 2D Shapes and Position

Look at the grid below and answer the questions.

Which shape is:

1. Above the purple square? \_\_\_\_\_
2. Below the green square (it's still a square it's just rotated a bit!)? \_\_\_\_\_
3. To the left of the pink octagon? \_\_\_\_\_
4. To the right of the yellow rectangle? \_\_\_\_\_
5. 2 spaces to the left of the turquoise pentagon? \_\_\_\_\_
6. 4 spaces to the right of the grey square? \_\_\_\_\_

Draw these shapes in the grid:

1. A blue circle to the right of the pink rectangle.
2. A black square to the left of the green star (actually a decagon - 10 sides).
3. An orange square 3 spaces below the red hexagon.
4. A green rectangle above the yellow circle.
5. A pink star (decagon) to the left of the purple pentagon.
6. A brown circle 2 spaces to the left of the pink triangle.