


# Adding and Subtracting Time

# 1

On the clocks below draw the hands to show the correct time and write the time underneath.

1 hour before




\_\_\_\_\_

Now




Seven o'clock

1 hour later




\_\_\_\_\_




\_\_\_\_\_




Quarter past nine




\_\_\_\_\_




\_\_\_\_\_



Ten past six




\_\_\_\_\_



\_\_\_\_\_











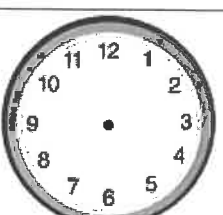



Five to two



\_\_\_\_\_

## Adding and Subtracting Time

On the clocks below draw the hands to show the correct time and write the time underneath













1 hour before	Now	1 hour later
 _____	 Five past seven	 _____
half hour before	Now	half hour later
 _____	 Ten past five	 _____
1 hour before	Now	1 hour later
 _____	 _____	 _____
half hour before	Now	half hour later
 _____	 Five past eight	 _____

↗ write it yourself!

draw  
your  
own  
hands  
↖













Adding and Subtracting Time

On the clocks below draw the hands to show the correct time and write the time underneath


half hour before	Now	half hour later
 _____	 Twenty-five to eleven	 _____
 _____	 _____	 _____
 _____	 _____	 _____
 _____	 _____	 _____

# Adding and Subtracting Time



On the clocks below draw the hands to show the correct time and write the time underneath

<p>half hour before</p>  <p>_____</p>	<p>Now</p>  <p>Five past ten</p> <p>_____</p>	<p>half hour later</p>  <p>_____</p>
<p>half hour before</p>  <p>_____</p>	<p>Now</p>  <p>Quarter to seven</p> <p>_____</p>	<p>half hour later</p>  <p>_____</p>
<p>quarter hour before</p>  <p>_____</p>	<p>Now</p>  <p>_____</p>	<p>quarter hour later</p>  <p>_____</p>
<p>half hour before</p>  <p>_____</p>	<p>Now</p>  <p>_____</p>	<p>half hour later</p>  <p>_____</p>



Write the correct times on the clock after reading the problems.



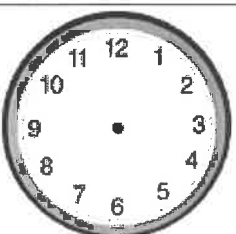

It was 10 o'clock. Sammy went for a walk for 2 hours. What time did he get home?





Imogen started to eat her lunch at 12.30. She finished is 30 minutes later. What time did she finish her lunch?



Mafana finished watching reading at 10 past 11. He had been watching it for 2 whole hours! What time did he start reading?



Edi took 15 mins to walk to school. School starts at ten to nine. What time does he need to leave the house?



Jack was allowed to watch Star Wars for one and half hours. He finished the film at 5 o'clock. What time did he start watching it?

