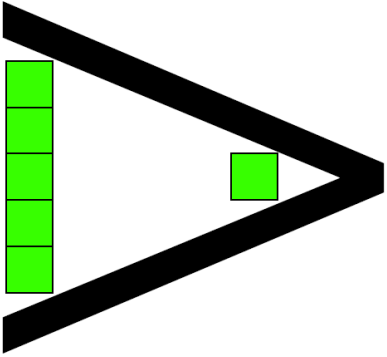


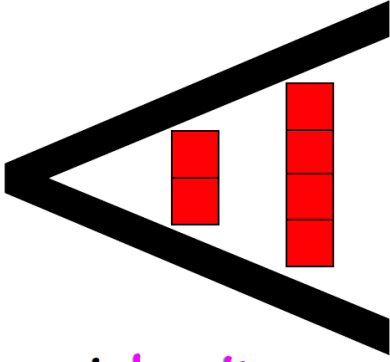
Here's a little reminder about the less than and greater than symbols.

Greater Than




5 is greater than 1
Bigger Larger More than

Less Than



2 is less than 4
Smaller Less Littler

Equal to



2 is equal to 2
Equals Same as Same

A

Copy and complete by writing $<$ or $>$ in the box.

1 $3.5 \square 3.7$

6 $7.8 \square 7.18$

2 $4.26 \square 4.6$

7 $9.42 \square 9.24$

3 $6.6 \square 6.11$

8 $1.13 \square 1.3$

4 $9.88 \square 8.99$

9 $5.66 \square 6.05$

5 $3.45 \square 4.53$

10 $2.75 \square 2.8$

What number lies halfway between:

11 0.35 and 0.39

16 3 and 3.3

12 1.6 and 1.7

17 1.8 and 2.2

13 4.2 and 5


18 6.34 and 6.44

14 1 and 1.5

19 0.96 and 1

15 8.72 and 8.92

20 2.5 and 2.8?



B

Write $<$ or $>$ in each box.

1 0.144 0.411

6 0.061 0.16

2 0.5 0.49

7 0.734 0.674

3 0.993 0.939

8 0.376 1.38

4 0.417 0.47

9 0.88 0.808

5 2.55 0.258

10 0.626 0.662

What number lies halfway between:

11 0.388 and 0.39

15 0.844 and 0.848

12 5.13 and 5.18

16 0.62 and 0.63

13 0.294 and 0.3

17 1.991 and 1.999

14 0.52 and 0.55

18 0.11 and 0.18 ?


Write these numbers in order, smallest first.

19 0.636 , 0.366 , 0.633 , 0.363

20 0.404 , 0.004 , 0.444 , 0.044

21 1.89 , 1.99 , 1.88 , 1.98

22 0.275 , 0.277 , 0.257 , 0.255



C

What number lies halfway between:

- | | | | |
|---|-----------------|---|---------------|
| 1 | 1.394 and 1.4 | 5 | 2.8 and 2.83 |
| 2 | 5.46 and 5.51 | 6 | 3 and 3.25 |
| 3 | 1.678 and 1.69 | 7 | 1.72 and 1.73 |
| 4 | 0.132 and 0.552 | 8 | 0.67 and 0.8? |

Arrange these numbers in ascending order.

- 9 92.2, 9.25, 0.99, 9.225, 0.952
10 3.47, 4.73, 3.417, 4.137, 3.174
11 6.118, 1.186, 1.6, 6.18, 1.81
12 0.13, 1.023, 0.113, 1.03, 0.123

Give the next five numbers in each sequence.

- | | | | | | |
|----|-------|------|-------|------|-------|
| 13 | 0.01 | 0.03 | 0.05 | 0.07 | 0.09 |
| 14 | 0.16 | 0.15 | 0.14 | 0.13 | 0.12 |
| 15 | 0.9 | 0.92 | 0.94 | 0.96 | 0.98 |
| 16 | 1.2 | 1.18 | 1.16 | 1.14 | 1.12 |
| 17 | 0.005 | 0.01 | 0.015 | 0.02 | 0.025 |
| 18 | 1.75 | 1.65 | 1.55 | 1.45 | 1.35 |

