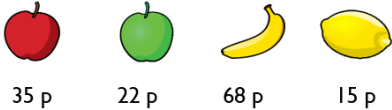


20.1.21

Problem Solving.

Use your knowledge and understanding of adding and subtracting to solve the problems below. There is a box next to each question to write/draw any workings and answer the question.


SALE



35 p 22 p 68 p 15 p

The cost of each piece of fruit is reduced by 10 p.

What are the new prices?



Rosie is counting backwards in 10s.

She says,

Forty-nine, thirty-nine,
twenty-nine



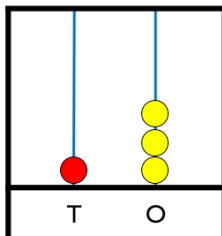
and then stops.

What numbers comes next and why?



49, 39, 29, _____, _____, _____

Tommy has three spare red beads.



What numbers could he make?
Explain your answer.

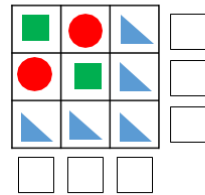


21				

Each row and column adds up to 100.

Complete the grid.

45	45	
	35	
15		65



Circles represent 20
 Triangles represent 10
 Squares represent 50

What is the value of each row and column?