


Circle groups of 5 counters.



1

Mo is putting 14 flowers into pots.




2

He puts 2 flowers into each pot.

How many pots does he need?

pots

Five children share 10 pencils equally.



How many will each child get?

Complete the number sentence.

$$\square \div \square = \square$$

3

Complete the sentences.




4

There are equal groups of flowers.

There are flowers in total.

Kim has 12 fish in a tank.

5



She shares the fish equally into 3 bowls.

How many fish are there in each bowl?

Dora has 8 apples.

6



She shares them equally between 2 bowls.



How many apples are in each bowl?