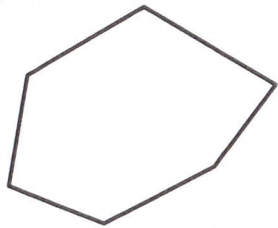

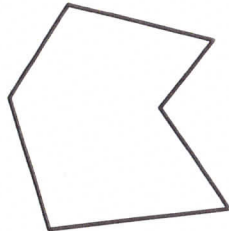


Visualise, describe and classify 2-D shapes

Look at these two shapes. Shape A is a **convex** shape and Shape B is a **concave** shape, but they both have six sides so they are both **hexagons**.

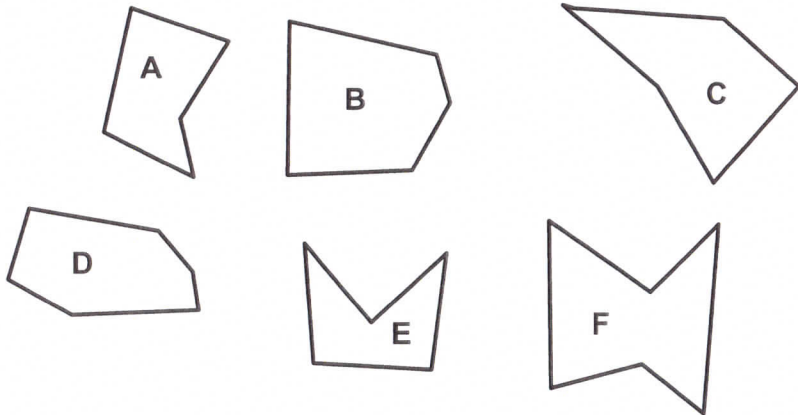


Shape A



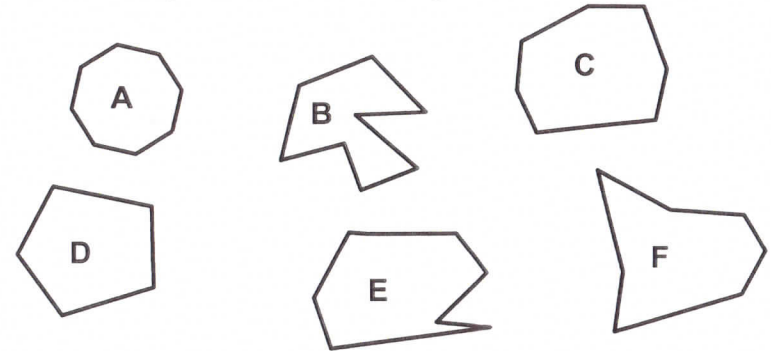
Shape B

Which of the shapes below are concave pentagons?

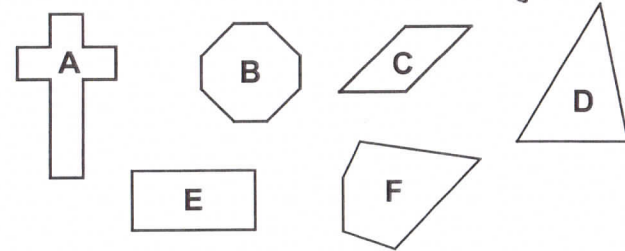


Visualise, describe and classify 2-D shapes

a) Colour the shapes that are convex octagons.



b) Colour the shapes that are irregular polygons. - *Does not have all congruent sides and angles.*



c) Colour the shapes that are quadrilaterals. - *Four sided shapes.*

