
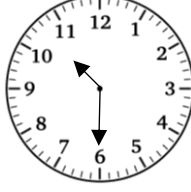
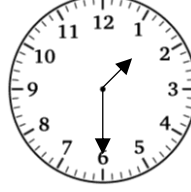

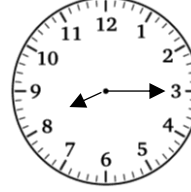
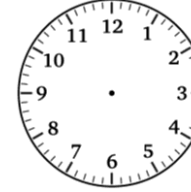
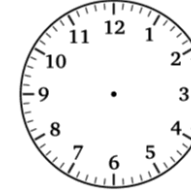
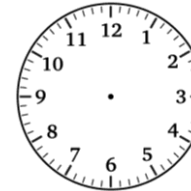


Wednesday 3<sup>rd</sup> January

1 hour later

Read the time on the clock and then tell me what time it will be 1 hour later. As an extra challenge you could also work out what time it will be in half an hour.

| Time on the clock   | An hour later | Extra challenge<br>Half an hour later |
|---|---------------|---------------------------------------|
|    |               |                                       |
|    |               |                                       |
|    |               |                                       |
|   |               |                                       |
|  |               |                                       |
|  |               |                                       |
|  |               |                                       |
|  |               |                                       |