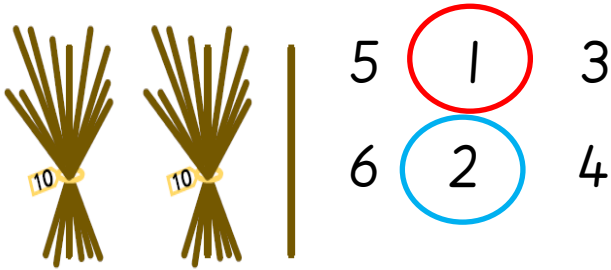


23.02.21 I can represent numbers to 50

Circle the number of tens in 21 in blue.




Circle the number of ones in 21 in red

Circle the number of tens in 15 in blue.



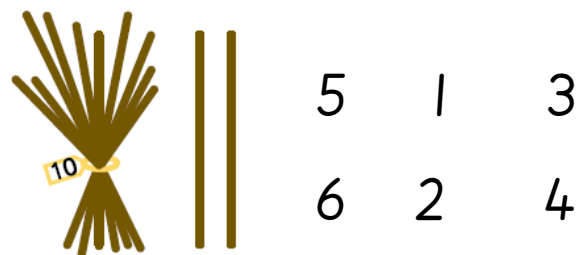
Circle the number of ones in 15 in red

Circle the number of tens in 34 in blue.



Circle the number of ones in 34 in red

Circle the number of tens in 12 in blue.




Circle the number of ones in 12 in red

Answer the questions below by circling true or false.

True

False


This shows 14



True

False

This shows 12





Colour in the 10 frames to match the number shown

10	1	1				
1	1	1				
1	1	1				

10	10					
1	1					
1	1					
1	1					

10	10					
10	10					
1	1					
1	1					

Challenge-

Number	Tens and Ones	Ten Frame	Straws	Words
26	2 tens 6 ones			Twenty-six
	__ tens __ ones			Thirty
	__ tens __ ones			Seventeen
	__ tens __ ones			