









02.03.21





## Ordering numbers - Part 2





Write all the numbers below in order from smallest to biggest. Remember that you can look at the Tens to help you. In the example, I know that 34 is bigger than 24 because 30 is bigger than 20.

34	19	24	48
----	----	----	----

15	27	36	9
			

35	23	19	43
			

49	50	26	15
			

12	47	31	27
			

Write all the numbers in the order from Biggest to Smallest.

48

47

38



39

16

13

20

21



36

27

37



39

21

24

38


41



Challenge:

Can you write one  
for Mr Boyd?

--	--	--	--



## Challenge:

Use the 50 square to help you complete the sentences below. Colour in the numbers you use.  
Try not to use the same number twice.

1	2	3	4	5	6	7	8	9	10
11	12	13	14	15	16	17	18	19	20
21	22	23	24	25	26	27	28	29	30
31	32	33	34	35	36	37	38	39	40
41	42	43	44	45	46	47	48	49	50

\_\_\_\_\_ is greater than \_\_\_\_\_

\_\_\_\_\_ is less than \_\_\_\_\_

\_\_\_\_\_ is less than \_\_\_\_\_

\_\_\_\_\_ is greater than \_\_\_\_\_

\_\_\_\_\_ is less than \_\_\_\_\_

\_\_\_\_\_ is greater than \_\_\_\_\_