


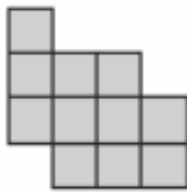
Today we are counting the sides of the shapes to find the perimeter. It is a good idea to mark where you began counting so you don't count again. This may seem like a super easy task but people often miss a side. Make sure you count every side.



The side length of each square is 1cm. Calculate the perimeter of each shape.

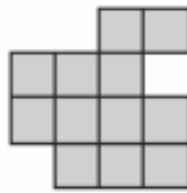


1)



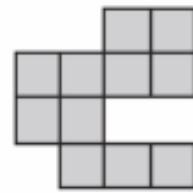
Perimeter = cm

2)



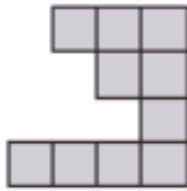
Perimeter = cm

3)



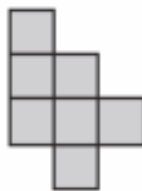
Perimeter = cm

4)



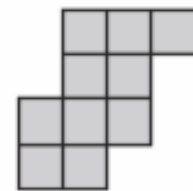
Perimeter = cm

5)



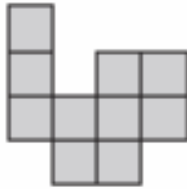
Perimeter = cm

6)



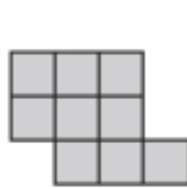
Perimeter = cm

7)



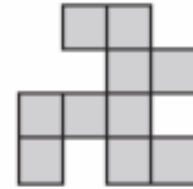
Perimeter = cm

8)



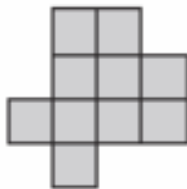
Perimeter = cm

9)



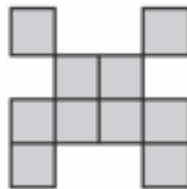
Perimeter = cm

10)



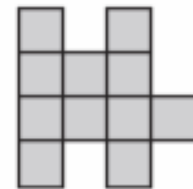
Perimeter = cm

11)



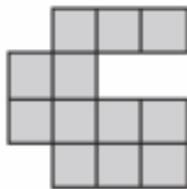
Perimeter = cm

12)




Perimeter = cm

13)



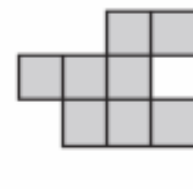
Perimeter = cm

14)



Perimeter = cm

15)



Perimeter = cm